

KENDRIYA VIDYALAYA SSG CISF SURAJPUR

AUTUMN BREAK HOLIDAY HOME WORK

CLASS – IV

हिंदी

सभी कार्य A4 शीट में करें।

1) स्वतंत्रता सेनानी से सम्बंधित कोई एक कहानी की किताब पढ़े।

किताब का नाम

लेखक

पकाशन

उन स्वतंत्रता सेनानी का चित्र चिपकाए और अपने शब्दों में कहानी का सार लिखें।

2) २० श्रुतिसम भिन्नार्थक शब्द और उनके अर्थ लिखकर याद करें

ENGLISH

General Instructions- Activity to be done neatly on A-4 sheet.

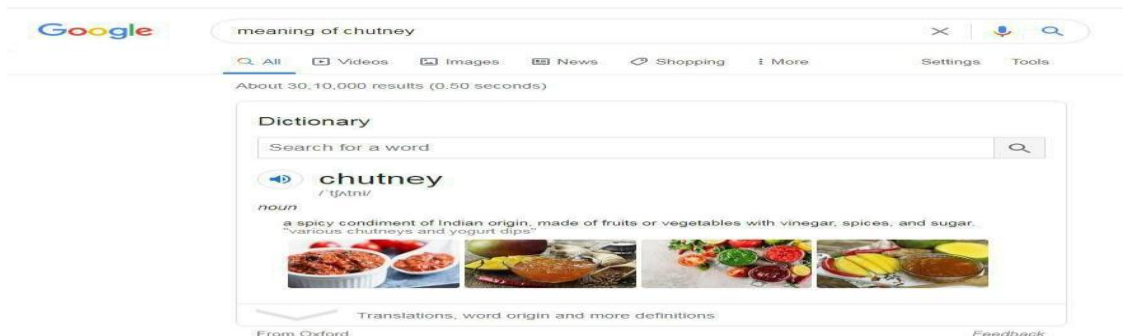
Q1. Look at the following entry for the word *chutney* in an online dictionary. It is an Indian word which is now used commonly in English:-

*Follow the steps and find the meanings of the words given below:-

1. Go to Google search.

2. Type the meaning or word and click on the search option.

3. A page like this (image given below) will open. Listen to the pronunciation of that word by clicking on (speaker icon) beside the word. Write the meaning of that word on A4 size sheet and frame a sentence with that word and also write whether it's a noun or a verb.



Use an online dictionary to find the meanings of these words of Indian origin.

bungalow

scented

jute

brink

cheetah

shampoo

delicious.

Strode

QII Write a diary entry of 250 words about “ My loopholes I felt after my Half Yearly Exams in different subjects and what steps I could take to rectify in future .

CLASS – IV (EVS)

General Instructions- Activity to be done neatly on A-4 sheet.

QI) Find out which National Highway is the oldest road in India. Also find out who built it andwhen.














Write the names of states through which this National Highway pass.

LOCATE THESE STATES ON POLITICAL MAP OF INDIA

Safety Rules 1

NAME:

Choose and write. Then match the sentences with the pictures.

	<ol style="list-style-type: none"> 1) When you go to amusement parks with lots of people, always with your family. 2) If a stranger asks you personal questions, 3) When you go to school, 4) When you go swimming, 5) If you are eating something, 6) When you are making something, 7) If somebody wants to touch you, remember that 8) If you want to be prepared for anything, 9) When you are playing near a street, 10) If a secret is scary, 11) If you get into a vehicle, 12) When you walk around town, 13) If you don't want to cut yourself, <p style="font-size: small;">avoid sharp objects and broken glass / handle with care / know your emergency telephone numbers / stay together / don't dash into the street / obey street signs and safety rules / no one should touch your private parts / swim with a partner / buckle up / keep your name and address private / don't eat and run / walk with a friend / tell a trusted adult</p>	
		
		
		
	  	

QII) Given below safety rule hand out is given to you plz read it carefully and answer the question given in the blank also match the picture . Do it in this same handout and paste it on A4 sheet.

MATHEMATICS

1) DO THE GIVEN WORKSHEET AND PRACTICE

Division Word Problems (A)

Name: _____

Date: _____

Solve each problem. Show your work in the box.

1. Oliver removed 56 marbles from his marble box and put them into 8 equal groups. How many marbles were in each group?

2. Amelia sent an equal number of messages each day for one week. At the end of the week, she had sent 49 messages. How many messages did she send each day?

3. In the morning, Emily decided to create some designs with her cereal bits. In total, she created 9 designs and used 63 cereal bits. About how many cereal bits were in each design? Do you think she used an equal number of cereal bits in each design?

4. Jack had many extra hockey cards, so he decided to give the extras equally to his 6 friends. If he gave away 48 cards, how many cards did each friend get?

2)MAKE ANY ONE PROJECT /MODEL OF FRACTION.

https://youtu.be/fTRyep0k2_4

<https://youtu.be/AisUPD8BXHU>

